

Std- V- _____

Name : _____

[10 x 1 = 10]

Q1. Fill in the blanks :

- a) $60 \times 400 =$ _____.
- b) The HCF of 15 and 20 is _____.
- c) The numbers which has only two factors are called _____ numbers.
- d) $161.42 + 100 =$ _____.
- e) The place of 8 in 14.786 is _____.
- f) If C.P. = ₹ 16,800 and S.P. = ₹ 18,200 then its profit is _____.
- g) Two angles which lie side by side are called _____ angles.
- h) I am a prime number . If you subtract 1 from me , I will become divisible by 9. Who am I ? _____
- i) The multiplicative inverse of $\frac{6}{9}$ is _____.
- j) The sum of the three angles of a triangle is always _____.

Q2. Choose the correct answer and fill in the blanks : [10 x 1 = 10]

- a) A triangle in which all the sides are different is called _____ triangle. (equilateral , scalene , isosceles)
- b) $0.00368 \times 100 =$ _____ . (3.68 , 0.368 , 36.8)
- c) The LCM of 11 and 22 is _____ . (11 , 22 , 10)
- d) When the two lines do not intersect each other , such lines are called _____ lines. (parallel , perpendicular , intersecting)
- e) $3.146 + 24.36 =$ _____ . (27.606 , 27.406 , 27.506)
- f) A number is divisible by 5 if the digit in the ones place is _____ or _____ . (1 or 5 , 0 or 5 , 2 or 5)
- g) $8 \div 4 + 3 \times 7 - 4 + 5 =$ _____ . (20 , 22 , 24)
- h) An angle whose measure is more than 90° but less than 180° is called a / an _____ angle. (obtuse , acute , right)
- i) If S.P. = ₹ 2186 , Profit = ₹ 745 then the C.P. is _____ .
(₹ 1441 , ₹ 1440 , ₹ 1442)
- j) $9 \times \frac{2}{18} =$ _____ . (1 , 2 , 0)

[10 x 2 = 20]

Q3. Solve :

- a) Multiply 9.143×3.2

b) Subtract 67.148 from 92.368

c) C.P. = ₹ 19,050 and Loss = ₹ 3000 Find S.P.

d) The product of 3, 5 and a third number is 60. What is the third number?

e) $3\frac{1}{2} \div 5\frac{2}{3}$

f) Find the LCM of 22, 44 and 66.

g) I wrote down a 4-digit number that is divisible by 3, 4, 5 and 6 but I spilled a cup of tea on it and can only see the first two digits. The first two digits are 95. What were the last two digits?

h) Write two equivalent fractions of $\frac{4}{9}$.

i) $\frac{1}{4}$ of $8 \div \frac{4}{5}$

j) Divide and write quotient and remainder.

i) $21483 \div 32$

Q4. Solve:

[$8 \times 5 = 40$]

a) Write the Multiplication table of 26.

b) Rohit bought a bike for ₹ 13,974 and spent ₹ 400 on it as overhead charges. Later, he sold the bike at a loss of ₹ 700. At what price did he sell the bike?

c) The cost of a pair of earrings is ₹ 214.35. Find the cost of 24 such earrings.

- d) Siddhi bought 6 Kgs of potatoes to make some dishes . If she used $1/4$ Kg of potato per dish , how many dishes did she make ?

- e) In a race , boy " A " will cross a hurdle every 14 minutes and boy " B " will cross a hurdle every 28 minutes. What time will they meet , if they started at 12 noon ?

- f) What is the product of the smallest number and the largest number formed by using the digits 3 , 4 , 6 , 5 ?

- g) The LCM and HCF of two numbers is 10 and 12 respectively . If one number is 20 , what is the other number ?

h) Divide $35.052 \div 2.3$

(ACTIVITY-20 MARKS)

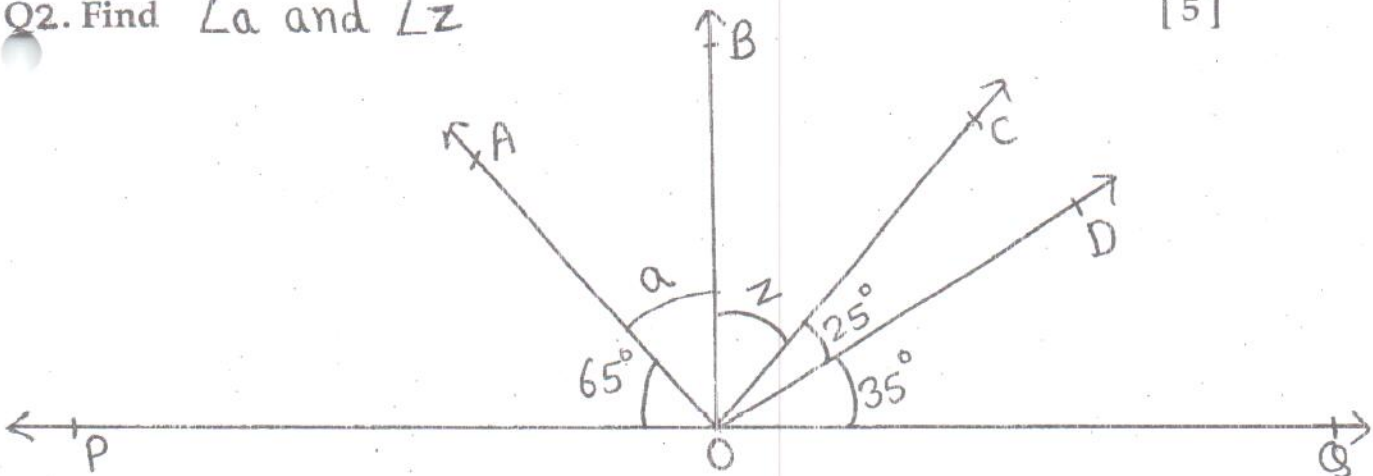
Q1. Draw, name and classify the following angles : [6]

a) 146°

b) 72°

Q2. Find $\angle a$ and $\angle z$

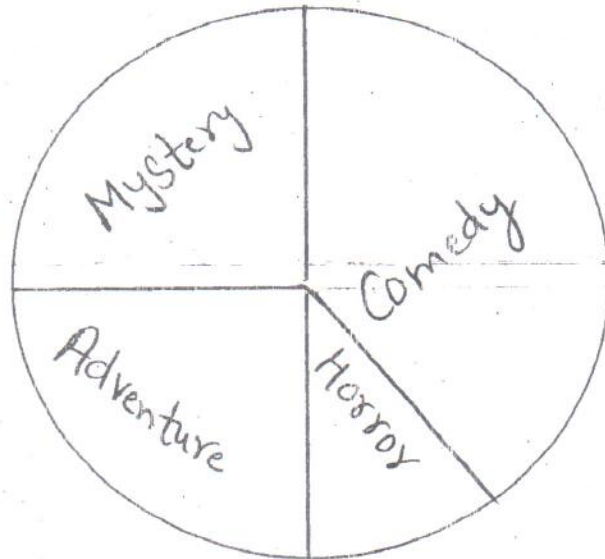
[5]



Q3. Classify the following triangles according to their sides and angles. [5]

- a) 80° , 60° , 40° - _____
- b) 12 cm , 7 cm , 11 cm - _____
- c) 45° , 90° , 45° - _____
- d) 6 cm , 3 cm , 6 cm - _____
- e) 52° , 36° , 92° - _____

Q4. The circle chart shows the favourite movie type of 80 people. Read the chart and answer the questions that follow: [4]



a) How many people like Horror movies ?

b) How many people like Mystery movies?

c) How many people like Comedy movies ?

d) How many people like Adventure movies ?

SECTION - A [READING]

Q.1. Read the following passage carefully and answer the questions that follow: (10)

There are wild dogs and pet dogs. Pet dogs are helpers and friends to people. There were no pet dogs 15,000 years ago. Men and women learned how to work with dogs. Dogs helped humans travel from Asia to North America 10,000 years ago by pulling sledges in snow. People say dogs are "man's best friend". They help with farming. They help with hunting. They help with fishing. They can pull things for people. They can find things. There are many colours of dogs. There are white dogs, grey dogs, black dogs, and brown dogs. A dog's fur can be short or long. Dogs have curly hair or straight fur. There are very small dogs. They are only 6-8 inches tall. There are very big dogs. They are about 3 feet tall. Some dogs can see well. Some dogs do not see very well. All dogs can hear well. They can hear sounds that people cannot hear. They can hear high sounds and low sounds. They can hear the sound very far away. All dogs can smell very well. They can smell 40 times better than humans! Dogs live 5 to 13 years, but some dogs live much longer. One dog lived to be 24 years old!

1. How did humans travel from Asia to North America? (1)

2. What is the expected lifespan of dogs? (1)

3. Describe the fur of dogs. (1)

4. Why do people say dogs are man's best friend? (1)

5. Write any two common nouns from the passage:- (2)

6. Write the synonyms of following words from the passage :- (2)

a. furious - _____ b. distant - _____

7. Write the antonyms of following words from the passage:- (2)

a. small - _____ b. foe - _____

SECTION - B [GRAMMAR]

Q.2. Rewrite the sentences by changing the number of the underlined nouns. Also do the necessary changes. (2)

1. The dog was killed with a knife.

2. His son-in-law is a singer.

Q3. Underline the adverbs in the following sentences and write their types. (2)

1. Sita left the class silently. _____

2. Rohit put the bag down. _____

Q4. Complete the verb table

Sr No	V1	V2	V3
1	begin		
2		lent	
3			cost
4	feel		

(4)

Q5. Identify the kind of sentences.

(2)

- i) Is Manoj a good boy? _____
- ii) Oh! What a pleasant surprise. _____

Q6. Underline the subject in the following sentences.

(2)

- i) Rohan is playing cricket.
- ii) The elephant's tusks are very valuable.

Q7. Fill in the blanks with correct degree of comparison.

(2)

- i) Asha is the _____ girl in the class. (beautiful)
- ii) Paris is _____ than England. (hot)

Q8. Fill in the blanks with suitable conjunctions.

(4)

(though, since, as, but, or, unless, so, because,)

- i) I called Tom, _____ he wasn't at home.
- ii) Work hard _____ you will fail in the examination.
- iii) She is honest, _____ everyone trusts her.
- iv) You won't get the award _____ you work hard for it.

Q9. Fill in the blanks with suitable prepositions.

(4)

- i) We used to live in a little hut _____ trees.
- ii) John asked me to go to him to buy a pair _____ shoes.
- iii) Sam walked _____ the path.
- iv) Sachin was standing _____ me.

Q.10. Punctuate the following sentences.

(4)

- i) what is tims phone number

- ii) my lunch contained sandwiches an apple cake and one raw carrot

- iii) diya i cant do this work

- iv) Thank you replied hiya

Q.11. Do as directed.

(4)

- i) Joy _____ new books. [buy] [present perfect]
- ii) We _____ our best. [do] [present continuous tense]

2. You are Tanya. Your friend Tina has secured 98% marks in her class V Science Talent Examination. Send an e-mail to her congratulating her.

(5)

SECTION - D [LITERATURE]

1. Write the meanings of the following words.

(4)

- i) barren - _____
- ii) queer - _____
- iii) elevators - _____
- iv) halt - _____

2. Make meaningful sentences using the following words.

(4)

- i) worthy - _____
- ii) defened- _____
- iii) nipped - _____
- iv) grab - _____

3. Complete the lines of the poem.

(5)

1. *People laughing, smiling,*

And never look at you!

2. *Very soon our Malu Bhalu*

Malu was a clever girl.

Q4. Read the following extracts carefully and answer the question that follows. (5)

1. "*It is now time to decide the Tunggi Ningthou, the future king.*"

i) What is the name of the lesson?

ii) Who said this extract ?

iii) To whom?

2. "Ah, here is my good cousin,"

i) What is the name of the lesson?

ii) Who said this extract to whom?

Q5. Answer the following question.

(12)

i) Why did the man rush back to the ship?

ii) Why are the two children nobody's friend?

iii) What did the crab do to Hari ?

iv) What are the things that the people carry with them, while moving around?

v) Which tribe of Red Indians attacked the travellers?

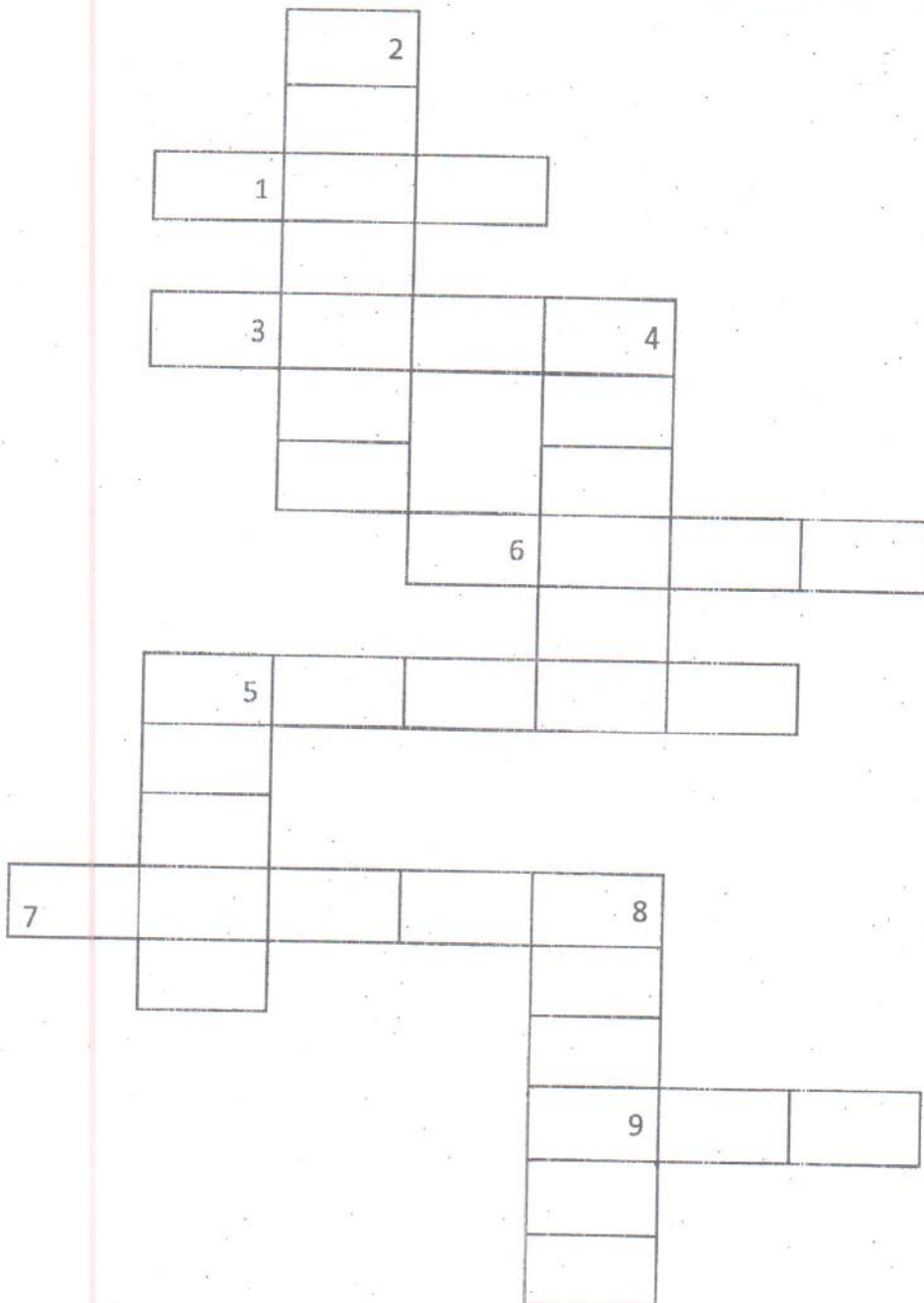
vi) How did the king want to select their future king?

DOWN

- 2. Abstract noun of 'Brave'
- 4. Antonyms of 'Safe'
- 5. Past tense form of 'Shake'
- 8. Feminine form of 'Brother'

Across

- 1. Masculine gender of 'Mom'
- 3. Antonyms of 'Borrow'
- 5. A collection of 'Bees'
- 6. Antonyms of 'Beautiful'
- 7. Plural form of 'Book'
- 9. Present tense form of 'Tried'



चिन्मय विद्यालय तारापूर.

एम. आय. डी. सी. एरिया सरावली, बोईसर.

इयत्ता ५ _____

मुल्यांकन ३ (२०१८ - २०१९)

गुण ५०

विषय मराठी. नाव _____

क्रमांक

प्रश्न १) मराठीत अर्थ लिहा. (द्वार, कथा, बक्षीस, देह, धरती) (५)

१ earth _____ २ body _____ ३ reward _____

४ story _____ ५ door _____

प्रश्न २) लिंग बदला.

(५)

१ राजा _____ २ माणूस _____ ३ मामा _____

४ महाराज _____ ५ विद्वान _____

प्रश्न ३) वचन बदला.

(५)

१ वारा _____ २ पिसारा _____ ३ झाड _____

४ कडधान्य _____ ५ पीक _____

प्रश्न ४) समानार्थी शब्द लिहा.

(५)

१ स्पर्धा _____ २ समुद्र _____ ३ प्राजवत्त _____

४ बाग _____ ५ किल्ला _____

प्रश्न ५) विरुद्धार्थी शब्द लिहा.

(५)

१ देवी _____ २ प्रत्यक्ष _____ ३ खाली _____

४ उत्साह _____ ५ शाहाणे _____

प्रश्न ६) कवितेच्या ओळी पूर्ण करा. [अंगावरती, पिवळ्या, बाकी, धरती, तालावर] (५)

१) मिरमिर मिरमिर त्या _____ माणे अमुचे जुळे !

२) माते माणी तेच शाहाणे _____ सारे खुळे !

३) हसते _____ फांदीवरती हा झोपाळा झुले

४) उन्हात _____ पाहा नाहती

५) टपटप पडती _____ प्राजवत्ताची फुले !

प्रश्न ७) वाक्यात उपयोग करा .

(५)

१ बोलतो _____

२ ममतीदार _____

३ धार्मिक _____

४ संतोष _____

५ उडवितात _____

प्रश्न ८) प्रश्नांची उत्तरे लिहा .

(१०)

१ गोंव्याच्या पश्चिमेला काय आहे ?

२ योगी राजाला काय म्हणाला ?

३ गिरीजा महानदी कुठून निघाली आहे ?

४ सप्तशृंगी कुठे आहे ?

५ गोंव्याच्या प्रमुख भाषा कोणत्या आहेत ?

प्रश्न ९) ' स्वामी विवेकानंद ' यांच्याबद्दल तुमचे विचार मांडा .

(५)

चिन्मय विद्यालय तारापुर
एम. आय. डी. सी. एरिषा सरावली, बोईसर
मूल्यांकन- 3- 2018-19

कक्षा- पाँचवीं

विषय- हिंदी

नाम _____

पूर्णांक - 100

अनुक्रमांक -

प्र.1) निम्नलिखित शब्दों में से उचित शब्द चुनकर खाली स्थान भरिए।

10

(पापड़, इंतजार, खामोशी, झूठ, तीतर, गुल्लक, दादी, आवाज़, जख्म, फूलदान)

- क) स्वामीनाथन अधीर होकर उनकी कहानी खल होने का _____ करने लगा।
ख) नल खोलो तो उससे पानी के बदले सूँ-सूँ की _____ आने लगती है।
ग) मेरी माँ ने केले के _____ बनाए थे।
घ) पिछले साल भी शिकारियों ने इसी तरह बहुत से _____ मारे थे।
ङ) स्वामीनाथन _____ के गलत जवाब से चिढ़ गया।
च) मुझे अपनी रोटियों को बचाने के लिए कितने _____ बोलने पड़ेगे।
छ) फ़ार्म हाउस में _____ थी।
ज) हमारी यह धरती भी इसी तरह की खूब बड़ी _____ है।
झ) तुम्हारी माँ हमारी दुकान से एक _____ लाई थीं।
ञ) कर्नल दत्ता ने तीतर के पैरों का _____ साफ़ किया।

प्र 2) निम्नलिखित कविता की पंक्तियाँ पूरी कीजिए।

5

छोटी -सी हमारी नदी _____ धार,
गर्मियों में _____ भर भिगो कर जाते पार।
पार जाते ढोर-डंगर, _____ चालू,
_____ हैं किनारे इसके _____ इसका ढालू।

प्र 3) निम्नलिखित पठित गद्यांश को पढ़कर पूछे गए प्रश्नों के उत्तर लिखिए।

सुबह का समय था। पहाड़ों के पीछे से सूरज झाँक रहा था। दस वर्ष का बिशन घर से बाहर निकल आया। वह रोज़ इसी समय, इसी रास्ते से कर्नल दत्ता के फ़ार्म हाउस पर जाता है। कर्नल दत्ता की पत्नी पढ़ाई में उसकी मदद करती हैं। फ़ार्म से लगे सेबों के बाग में कीटनाशक दवा का छिड़काव हो रहा था और बहुत तड़के शुरू हो जाता था। बिशन पगडंडी से अभी सड़क तक आ ही रहा था कि उसे गोली चलने की आवाज़ सुनाई दी।

क) पहाड़ों के पीछे से कौन झाँक रहा था ?

1

ख) कर्नल दत्ता की पत्नी पढ़ाई में किसकी मदद करती हैं ?

2

ग) कीटनाशक दवा का छिड़काव कहाँ हो रहा था ?

2

प्र 4) निम्नलिखित काव्यांश को पढ़कर पूछे गए प्रश्नों के उत्तर लिखिए।

कच्चे-बच्चे धार- कछारों पर उछल नहा लें,
गमछों-गमछों पानी भर-भर अंग-अंग पर ढालें।
कभी-कभी वे साँझ-सकारे निबटा कर नहाना
छोटी-छोटी मछली मारें आँचल का कर छाना।
बहुएँ लोटे-थाल मॉजती रगड़-रगड़ कर रेती,
कपड़े धोती, घर के कामों के लिए चल देती।

क) बहुएँ क्या मॉजती हैं?

1

ख) बच्चे किससे पानी भर-भर अंग-अंग पर ढालते हैं ?

2

ग) बच्चे किसका छाना बनाकर मछली मारते हैं?

2

प्र 5) निम्नलिखित शब्दों के अर्थ लिखिए।

क) अमराई - _____

ख) उपयोग - _____

2

प्र 6) किसने, किससे कहा?

क) " मैं चार पापड़ लाई हूँ। "

4

ख) "लड़के रुक जा, नहीं तो मैं गोली मार दूँगा। "

प्र 7) निम्नलिखित प्रश्नों के उत्तर लिखिए।

क) नीनी कोको के घर क्यों आया था?

3

ख) बरसात के मौसम में पानी कहाँ-कहाँ भर जाता है?

3

ग) राजम ने कहाँ से गोली चलाकर शेर को मार डाला?

3

प्र 8) निम्नलिखित वाक्यों को कोष्ठक में दिए गए शब्दों से पूरा कीजिए। (के सामने, के लिए, के ऊपर) 3

क) पेड़ की डाल _____ चिड़िया है।

ख) मेरे घर _____ एक बगीचा है।

ग) गरीबों की मदद _____ भगवान सदा तैयार रहते हैं।

प्र 9) कोष्ठक में दी गई क्रिया का उचित रूप लिखकर वाक्य पूरे कीजिए।

क) दिनेश का भाई कल _____ । (आना- भविष्यकाल)

ख) संदीप ने गृहकार्य _____ । (करना- भूतकाल)

ग) अध्यापिका हिंदी _____ । (पढ़ाना- वर्तमान काल)

3

प्र 10) निम्नलिखित विराम चिह्नों को पहचानकर उनके नाम लिखिए। 3
(दोहरा उद्धरण चिह्न, अपूर्ण विराम, अल्प विराम)

क) : _____ ख) _____
ग) " " _____

प्र 11) निम्नलिखित वाक्यों में से विशेषण और क्रियाविशेषण शब्द अलग-अलग करके लिखिए। 6

वाक्य	विशेषण	क्रियाविशेषण
क) गरम खाना धीरे-धीरे खाओ।		
ख) काला घोड़ा तेज़ दौड़ता है।		
ग) शीतल पवन मंद-मंद चल रही थी।		

प्र 12) निम्नलिखित विकल्पों में से सही पर्यायवाची शब्द चुनकर लिखिए। 3

क) रात्रि - _____		(सूरज, शरीर, रजनी)
ख) शेर- _____		(वनराज, पानी, पेड़)
ग) सोना- _____		(दुश्मन, कनक, सुत)

प्र 13) निम्नलिखित श्रुतिसम भिन्नार्थक शब्दों के अर्थ लिखिए। 2
(सखी, भौरा)

क) अलि - _____ ख) अली- _____

प्र 14) निम्नलिखित शब्दों के विलोम शब्द लिखिए। 3

क) सज्जन- _____ ख) निर्बल- _____
ग) संयोग - _____

प्र 15) निम्नलिखित विकल्पों में से मुहावरे के सही अर्थ चुनकर लिखिए। 2

क) नाक रगड़ना - _____	(ललचाना, भूख लगाना, खुशामद करना)
ख) मुँह छिपाना - _____	(लज्जित होना, पछताना, भाग्य उदय होना)

प्र 16) निम्नलिखित वाक्यों को शुद्ध करके फिर-से लिखिए। 5

क) चिड़ियाएँ दाना चुग रही हैं। _____
ख) बच्चे आँख से देखता हैं। _____
ग) मैंने मिठाई खाना है। _____
घ) जा चुके हैं वे लोग। _____
ङ) भाषण देते हैं प्रधानमंत्री। _____

प्र 17) निम्नलिखित अपठित गद्यांश को पढ़कर पूछे गए प्रश्नों के उत्तर लिखिए।

देशभर में अंग्रेजों का आतंक था। अंग्रेजों के विरुद्ध लोगों में असंतोष और क्रोध की ज्वाला भड़क रही थी। लोगों को डराने और दबाने के लिए अंग्रेजी सेना जगह-जगह मार्च करती थी। एक दिन अंग्रेजी सैनिक अधिकारी को मंगल पांडे जैसा दृष्ट-पुष्ट और लंबा चौड़ा युवक मिल गया। अंग्रेज अधिकारी ने मंगल पांडे से फ़ौज में भर्ती होने की बात कही। वह बिना किसी लोभ-लालच के 22 वर्ष की उम्र में 10 मई, 1849 को ईस्ट इंडिया कंपनी की फ़ौज में भर्ती हो गए।

क) देशभर में किसका आतंक था ? 1

ख) मंगल पांडे से किसने फ़ौज में भर्ती होने की बात कही? 2

ग) अंग्रेजों के विरुद्ध लोगों में कैसी ज्वाला भड़क रही थी ? 2

प्र 18) निम्नलिखित काव्यांश को पढ़कर पूछे गए प्रश्नों के उत्तर लिखिए।

बह गई उस काल एक ऐसी हवा,
वह समंदर ओर आई अनमनी।
एक सुंदर सीप का मुँह था खुला,
वह उसी में जा पड़ी मोती बनी।

क) किसका मुँह खुला था?

1

ख) हवा किस ओर आई?

2


ग) बूँद सीप में जाकर क्या बनी?

2

प्र 19) निम्नलिखित विषय पर अनुच्छेद लिखिए।

‘समय का सदुपयोग’

5



CHINMAYA VIDYALAYA TARAPUR

P-201 MIDC IndlArea, Saravali, Boisar

Evaluation-III 2018-2019

STD-V

Sub-General knowledge

Marks -50

Name _____

Roll no. _____

Q.1 Choose the correct answer and fill in the blanks : **10M**

(Oscar, Russia, Zoroaster, Guten Tag, Kerala, Rome, hat-trick, BCCI, Taoism and Hinduism, Cinematographer)

- a. Italy is famous for the Leaning tower of pisa. Its capital city is _____.
- b. _____ religions use yoga to centre themselves.
- c. _____ is the nickname of the Academy Award.
- d. Three wickets taken in three successive balls by the same bowler means _____.
- e. Mohiniyattam is a traditional Indian dance form popular in _____.
- f. _____ shoots the film with a movie camera .
- g. From Italy you travel by train to Germany. The conductor is German. you wish him by saying _____.
- h. _____ is the organizer of the Indian premier league tournament.
- i. _____ founded the Parsi religion.
- j. _____ is the largest country in the world whose capital is Moscow.

Q .2 Answer the following questions: **10M**

a. Which European city was divided by a wall?

b. What is the name of the river whose delta is shared by India and Bangladesh?

c. Guru Gobind Singh gave girls and women a middle name Kaur .What is the popular translation for this word?

d. When we speak of batsman getting a ton, what does it mean?

e. What is the maximum number of overs a bowler can bowl in T20 cricket?

f. How long is the duration of one innings of a T20 match?

g. What is the name of the snake in the Jungle Book?

h. Which was the first colour movie to win a Best picture Academy Award?

i. Name the person who won a record four Academy Awards at a single ceremony.

j. Name the team that won the inaugural IPL.

Q.3. Name the following:

10 M

a. Any two musical instruments:

b. Any two Animation films.

c. Any two outdoor games.

d. Any two dance forms.

e. Any two famous landforms.

Q.4. Identify the following personalities:

4M



Q.5. Identify the following airlines. Choose the names of the airlines from the help box.

6M

1. City - Sydney

Code -SYD

Airlines _____

2. City-Delhi

Code-DEL

Airline _____

3. City -Singapore

Code - SIN

Airline _____

4. City-Dallas

Code-DFW

Airline _____

5. City - London

Code- LHR

Airlines _____

6. City-Hong kong


Code-DFW

Airline _____

Q 6 .Complete the following table:

10M

Books	Authors
1. A Bunch of old letters	
2 .Cricket my style	
3.	Narendra Modi
4.	Kiran Bedi
5.Wings of Fire	
6.Eternal India	
7.	Vishnu Sharma
8.Revolution 2020	
9.My experiments with truth	
10.Living with honour	



Chinmaya Vidyalaya Tarapur
P-201, ind. Area, Saravali, Boisar
Evaluation-III 2018-2019
Sub- EVS

Std-V - _____

Name _____

Marks-100

Roll no. _____

Q.1 Fill in the blanks.

[10X1=10]

1. A book in Gujarati 'Sant-Charan-Raj-Sevita, Sahaj' is written by _____
2. Some habits we get from our family, and some skills we pick up from our _____
3. The colour of our eyes is _____ from our parents.
4. _____ twins are exactly alike.
5. 'Torang' means _____ in Kuduk language.
6. In Mizoram, a _____ is used as a standard unit to measure paddy and other grains.
7. The dried dung of animals like cows and buffaloes are used as _____.
8. Cotton used to be spun on a _____ by the village people at home.
9. Littering garbage around spreads _____.
10. _____ between the members is the strength of a team.

Q.2 Choose the correct answer and fill in the blanks.

[10x1=10]

1. Players are recognized by their _____ rather than by their caste or economic status.
[ability, colour, height]
2. Sabarmati Ashram is in _____. [Ahmedabad, Bhavnagar, Rajkot]
3. A big wall built across the river is called a _____. [bridge, dam, road]
4. Empty bottles and newspapers are sold to the _____.
[green grocer, junk seller, cobbler]
5. If farmers use chemicals the soil becomes _____. [barren, loose, soft]
6. In earlier times farmers used _____ leaves to protect the seeds from insects.
[banana, neem, tulasi]
7. According to 'Right to Forest Act' people who have been living in the forest for at least _____ years have a right over the forest land and what is grown on it. [20, 38, 25]
8. There are _____ players in basketball team. [7, 5, 9]
9. _____ is the main occupation of villagers. [Farming, Teaching, Fishing]
10. Pulse- Polio programme is to eradicate _____. [Cancer, Polio, Blindness]

Q.3 Answer the following questions.

[10x2=20]


1. What is heredity?

2. How do plants like croton give a signal when they become dry?

3. Who are tribals?

4. What is compost? How can it be made?

5. Identify the following pictures and name them.



6. What is displacement?

7. Name any four states in India where forests are found.

8. What is gender bias?

9. Why is number of slums in big cities growing rapidly?

10. Name any two hereditary and non-hereditary diseases.

Q.4 Answer the following questions.

1. a) What is transplantation?

b) Name the following processes.

1. Artificial supply of water- _____

2. The practice of cultivating land - _____

3. To separate grains from the stalk - _____

4. Separating husk from seeds- _____

2. Why are earth worms called "Farmer's best friend"?

3. a. What would happen if girls are not allowed to play games, to study or to do some other work of their choice?

b. Name the game played by following players.

a) P.V. Sindhu- _____ b) Mary Kom- _____

4. What is deforestation? How does it affect forest dwellers?

5. How does building of dam affect the life of the people living in that area?

6. What did Gregor Mendel find about the pea plant?


7. What is jhoom farming?

8. How is life in village different from that of cities ?

Activity [20m]

1. Identify the following personalities and write one great work done by them.

[6m]







2. Draw the following and name them

a. Two tools used for farming.

[5m]

a. Two fuels used for cooking.

[4m]

c. Two forest products.

[5m]

CHINMAYA VIDYALAYA TARAPUR
P-201, M.I.D.C. Indl. Area, Saravali, Boisar
EVALUATION -III- 2018-19

Std: V
Name : _____

Sub: Logic and Reasoning

Marks - 25
Roll No - _____

Q1. Choose the correct option to complete the pattern.

[7 X 1 = 7]

1. 58, 52, 46, 40, 34, _____

a. 26

b. 28

c. 30

2. 3, 4, 7, 8, 11, 12, _____

a. 7

b. 10

c. 15

3. 31, 29, 24, 22, 17, _____

a. 15

b. 14

c. 12

4. 2, 4, 6, 8, 10, _____

a. 11

b. 12

c. 13

5. 80, 10, 70, 15, 60, _____

a. 20

b. 25

c. 30

6. AZ, GT, MN, _____, YB

a. KF

b. RX

c. SH

7. AZ, CX, FU, _____

a. IR

b. IV

c. JQ

Q2. Select the related options from the given alternatives:

[6 x 1 = 6]

1. Cup: Lip: : Bird: _____

a. Bush

b. Grass

c. Beak

2. Flow: River: : Stagnant: _____

a. Rain

b. Stream

c. Pool

3. Paw: Cat: : Hoof: _____

a. Lamb

b. Horse

c. Lion

4. Architect: Building: : Sculptor: _____

a. Statue

b. Stone

c. Shampoo

5. Eye: Myopia: : Teeth: _____

a. Pyorrhoea

b. Cataract

c. Eczema

6. Blunt: Sharp: : Sow: _____

a. Water

b. Crow

c. Reap

Q. 3. Circle the odd one out.

[7 x 1 = 7]

- | | | | |
|--------------|-----------|-----------|-------------|
| 1. Chicken | Swan | Crocodile | Frog |
| 2. Cap | Veil | Hat | Helmet |
| 3. Kiwi | Eagle | Emu | Ostrich |
| 4. Rigveda | Yajurveda | Ayurveda | Atharvaveda |
| 5. Curd | Butter | Cheese | Oil |
| 6. Pear | Apple | Litchi | Orange |
| 7. Chameleon | Crocodile | Alligator | Locust |

Q. 4. Choose the correct options from the given alternatives: [5X1=5]

- 1) If FRIEND is coded as HUMJTK, how can CANDLE be written in that code?
A. DEQJQM B. DCQHQB C. EDRIRL
- 2) If FRAGRANCE is written as SBHSBODFG, how can IMPOSING be written?
A. NQPTJHOJ B. NQPTJOHJ C. NQTPJOHJ
- 3) If ROBUST is coded as QNATRS in a certain language, which word would be coded as ZXCMP?
A. AWDLQ B. AYDNQ C. BZEOR
- 4) If ZEBRA can be written as 2652181, how can COBRA be written?
A. 302181 B. 3152181 C. 31822151
- 5) If 'eraser' is called 'box', 'box' is called 'pencil', 'pencil' is called 'sharpener', and 'sharpener' is called 'bag', what will a child write with?
A. Eraser B. Pencil C. Sharpener

CHINMAYA VIDYALAYA TARAPUR
P-201, MIDC Area, Saravali, Boisar
Evaluation-III 2018-2019

Std-V
Sub: Value Education
Name: _____

M.Marks:25
RollNo. _____

Q.1.Fill in the blanks :- (10 Marks)

1. The globe in Chinmaya Vidyalaya Flag stands for _____.
2. Aradhana Day is observed on _____.
3. The word 'Chinmaya' means _____.
4. Punyakarmana _____ Sarthakam.
5. _____ to god in any way is a prayer.


Q2. Complete the following- (5 Marks)

To my _____ and my people I pledge my _____
In their _____ and _____ alone lies my _____

Q3. Answer the following questions :- (10Marks)

a. Write any five ways of praying to God.

b. What are the five ways in which you can be independent?



CHINMAYA VIDYALAYA TARAPUR

P-201 MIDC INDI Area, Saravali, Boisar

Evaluation III (2018-2019)

Std : V

Sub: Information Technology

M.Marks:40

Name: _____

Roll No: _____

Q1. Fill in the blanks.

[6x1=6]

1. _____ is a box on the left side which displays the address of the current cell.
2. The _____ mail option is used to send messages to people on email account.
3. _____ stands for Interconnection of Computer Networks.
4. The spreadsheet of Excel is also known as _____.
5. Exploring different websites is called _____ the net.
6. A single worksheet has maximum of _____ rows.

Q2. Choose the correct answer from the options given and fill in the blanks.

[5X1=5]

1. A workbook includes _____ worksheets by default.
a) two b) four c) three
2. _____ is a component of compose mail of an email account.
a) Webpage b) Attach a File c) Copy
3. The vertical lines of the cells are called _____.
a) columns b) cells c) rows
4. _____ is an area in an email account used to write and send mails to people.
a) Inbox b) Compose mail c) Write mail
5. Grouping one or more cells together is known as _____.
a) merging cells b) joining cells c) combining cells

Q3. Give two examples for the following.

[3X1=3]

- i) Search Engines - _____ , _____
- ii) E-mail account - _____ , _____
- iii) Websites - _____ , _____

Q4. Answer the following questions.

[6X3=18]

1. Explain the term web browser.

2. How do you start an e-mail account?

3. What is formula bar in MS- Excel?

4. What are the uses of Internet?

5. Explain the term worksheet in MS Excel.

