

CHINMAYA VIDYALAYA TARAPUR
P-201, MIDC. Indl. Area, saravali, Boisar.

Evaluation -III 2018-2019

STD :- II- _____

Subject :- Mathematics

Marks - 100

Name :- _____

Roll No. _____

Q.1 Fill in the blanks

[10 × 1 = 10]

- a) The standard unit of measuring length is _____
- b) One fourth is written as _____
- c) $8 \times \underline{\quad} = 24$
- d) $1 \text{ kg} = \underline{\quad} \text{ g}$
- e) $1 \text{ metre} = \underline{\quad} \text{ centimetre.}$
- f) $145 + 0 = \underline{\quad}$
- g) Eight hundred eight can be written in figures as _____
- h) $92 \times 0 = \underline{\quad}$
- i) The value of the digit 6 in 56 is _____
- j) In any fraction the number written below the line is called the _____

Q.2 Choose the correct answer and fill in the blanks.

[10 × 1 = 10]

- a) _____ is the denominator in $\frac{5}{8}$ (8, 5, 0)
- b) _____ is an odd number. (548, 421, 254)
- c) Which of the following fractions is the greatest? _____ $(\frac{1}{9}, \frac{1}{2}, \frac{1}{5})$
- d) _____ sign is used for multiplication (+, -, ×)
- e) A number has nine ones, six tens and eight hundreds. What is the number _____ (869, 896, 968)
- f) $20 \times 8 = 8 \times \underline{\quad}$ (20, 30, 10)
- g) 1 litre = _____ millilitres (100, 1000, 10)
- h) Which number makes the equation true? $8 + 12 = 20 - \underline{\quad}$ (0, 1, 2)
- i) Compare $22 + 10$ 32 (=, +, >)
- j) $65 - 0 = \underline{\quad}$ (65, 0, 55)

Q.3 Circle the smallest number:

[10 × 2 = 20]

- a) 422 345 936 597

Q.4 Arrange the following numbers in ascending order.

- a) 316 926 115 644
- _____

Q.5 Circle the odd number.

- a) 147 318 415 572

Q.6 Arrange the following numbers in descending order.

a) 719 938 214 550

Q.7 Write in expanded form.

a) $435 =$ _____

Q.8 Add the following.

a) 104 m 32 cm

+118 m 21 cm

Q.9 Multiply the following.

a) 424

× 2

Q.10 Divide the following.

a) $9 \overline{) 54}$

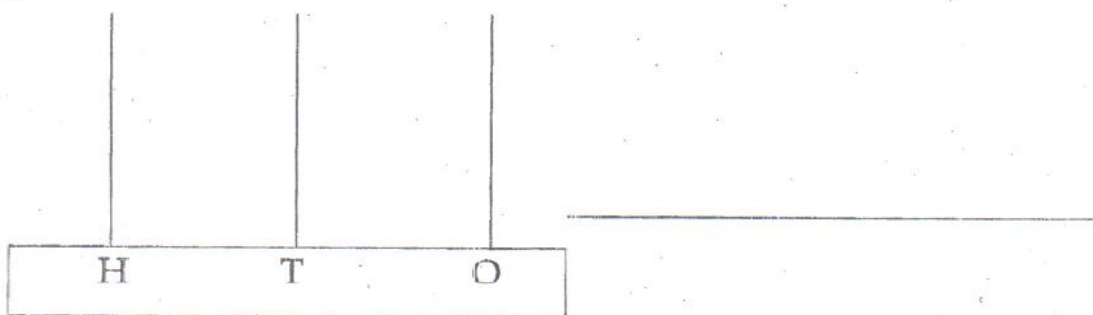
Q.11 Subtract the following.

a) 485 ml

-190 ml

Q.12 Represent the number on the abacus and write its number name.

a) 435



Q.13 Soham's weight is 54 kg and the weight of his mother is 69 kg. Find the difference in their weight?

Q.14 Diya used 4L 850ml of white paint and 7L 325ml of red paint to paint her room. What is the total paint used?

Q.15 Aaron bought 8m of cloth. He used 3m from it. How much cloth is left?

Q.16 There are 25 boys and 23 girls in class 3A. How many children are there in the class?

Q.17 Bruno, a dog is 45 cm high. Grumpy, a giraffe is 85 cm taller than Bruno. What is Grumpy's height?

Q.18 There are 87 apples in a box. How many apples are there in 9 such boxes?

Q.19 Write the multiplication table of 8.

Q.20 Write the place and place value of the underlined digit.

Number	Place	Place value
a) 4 <u>3</u> 9		
b) <u>3</u> 25		
c) 64 <u>7</u>		
d) <u>9</u> 26		
e) 1 <u>3</u> 9		


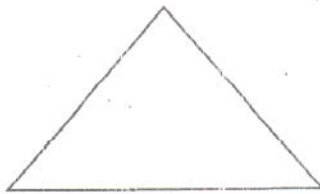

Activity:-


[10 X 2 = 20]

Q.21 Colour the odd numbers with red.

417	924	731
118	135	222
515	646	853
213	967	494
721	248	637
142	329	166

Q.22 Divide and shade to show the given fraction.

 $\frac{3}{4}$  $\frac{1}{2}$  $\frac{4}{6}$  $\frac{5}{7}$  $\frac{1}{4}$ 



STD-II - _____
NAME: _____

SUB: English

Marks-100

ROLL NO. _____

Q1. Underline the proper noun and circle the common noun: (3)

- a) Tommy is my pet dog.
- b) Pooja went to doctor.
- c) My uncle lives in Mumbai.

Q2. Fill in the blanks with was or were: (3)

- a) They _____ singing on stage.
- b) It _____ a wet and cold morning.
- c) He _____ jumping on the bed.

Q3. Choose the suitable adjectives from the box and fill in the blanks: (3)

old	brown	sunny
-----	-------	-------

- a) It is a _____ day.
- b) Neha has a _____ bag.
- c) An _____ lady was crossing the road.

Q4. Fill in the blanks with correct pronoun: (3)

- a) Miss Sneha is a teacher. _____ is very short.
- b) I am Kavya and she is Navya. _____ are sisters.
- c) Ram is a good boy. _____ completes his work on time.

Q5. Write the compound words: (3)

- a) Rain + drop = _____
- b) Tea + spoon = _____
- c) Star + fish = _____

Q6. Underline the joining words: (5)

- a) The woman is short but the man is tall.
- b) You can sleep on the bed or on the couch.
- c) Give me a sandwich and a glass of milk.
- d) `Ajay could not go out because it was raining.
- e) Naina and Sunaina are twin sisters.

Q7. Rewrite the sentences using capital letters, full stop and question mark wherever necessary: (5)

a) have you seen the gateway of india in mumbai

Ans: _____

b) my mother will travel to america in june

Ans: _____

c) simran is going to delhi on monday

Ans: _____

d) which bird is that

Ans: _____

e) today we studied sanskrit in our vidyalaya

Ans: _____

Q8. Fill in the blanks using has or have: (5)

a) The table _____ four legs.

b) Amey and Arjun _____ a new pup.

c) The plants _____ flowers

d) Tarun _____ a bicycle.

e) The rabbit _____ long ears.

Q9. Circle the preposition from the following sentences: (5)

a) The boy is hiding behind the cupboard.

b) The frame is on the table.

c) The bird is flying over the tree.

d) The girl is standing under the tree.

e) There is a tree in front of the house.

Q10. Rewrite the adverbs correctly to complete the sentences: (5)

a) _____ we got our grades. (final)

b) Lata watched the tennis game _____. (close)

c) We danced _____ around the school yard. (merry)

d) Children were reading the book _____. (quiet)

e) Arun banged the door _____. (angry)

Q11. Complete the poem:

(5)

How do you like to go up in a swing.

Till I can see so wide,

Q12. Answer the following questions:

(15)

1. Where did Mr Grouch live?

Ans: _____

2. Where did Daedalus land?

Ans: _____

3. What is the pleasantest thing the child can do?

Ans: _____

4. When was Moniya born?

Ans: _____

5. Who did Emperor Akbar want to punish?

Ans: _____

6. Who put Daedalus and Icarus in the prison?

Ans: _____

7. What did Moniya miss about Porbander?

Ans: _____

8. What lesson did Mr Grouch learn at the end?

Ans: _____

9. Who actually pulled Akbar's beard?

Ans: _____

Q16. Look at the picture carefully and answer the questions that follow: (10)



1. How many people are there in the picture?

Ans: _____

2. Is there a house in the picture?

Ans: _____

3. How many flowers are there?

Ans: _____

4. What are the children playing with?

Ans: _____

5. Where is the tree?

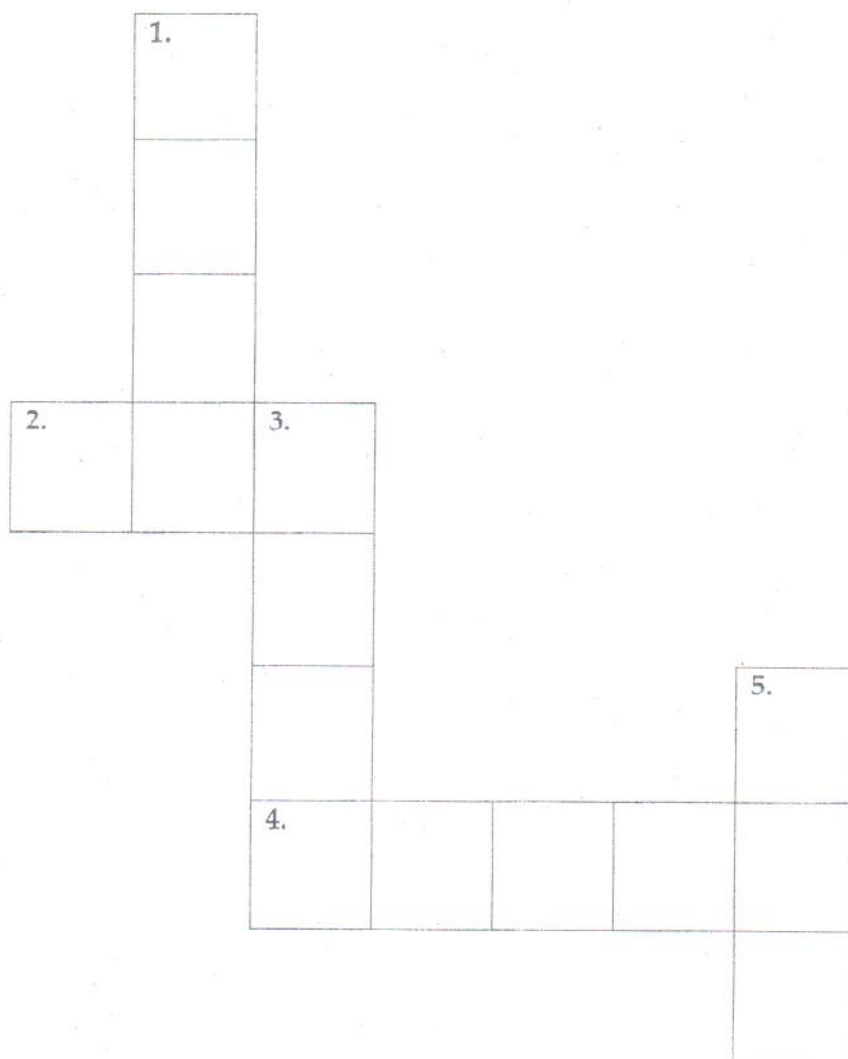
Ans: _____

ACTIVITY

Q17. Homophones: Crossword puzzle

A] Use the correct word from the box given below and fill in the puzzle:

blue	read	deer	write	ate
blew	red	dear	right	eight



B] Fill in the blanks:

ACROSS	DOWN
2. I have a _____ rose.	1. The sky is _____.
4. I think you are _____.	3. A _____ has four legs.
	5. I _____ ice-cream yesterday.

चिन्मय विद्यालय तारापूर.

एम. आय. डी. सी. सरिया सरावली, बोईसर.

इयत्ता २ _____ मूल्यांकन - ३ - २०१८ - २०१९. गुण ५०
विषय-मराठी. नाव _____ क्रमांक

प्रश्न १) वचन बदला (झाडे, मांजरी, फुगे, कळ्या, गायी) (५)

१) झाड - _____ ३) कळी - _____
२) गाय - _____ ४) मांजर - _____ ५) फुगा - _____

प्रश्न २) विरुद्धार्थी शब्द लिहा. (शत्रू, चूक, थंड, बुटका, काळा) (५)

१) बरोबर × _____ २) मित्र × _____ ३) पांढरा × _____
४) उंच × _____ ५) गरम × _____

प्रश्न ३) लिंग बदला. (कुत्रा, मुलगी, आजोबा, गाय, सिंहिण) (५)

१) सिंह - _____ २) बैल - _____ ३) कुत्री - _____
४) आजी - _____ ५) मुलगा - _____

प्रश्न ४) अंकात लिहा. (५)

१) तेवीस २) सत्तावीस ३) अठ्ठावीस

४) पंचवीस ५) बावीस

प्रश्न ५) अक्षरात लिहा. (५)

१) २४ - _____ २) २६ - _____ ३) २९ - _____

४) २१ - _____ ५) ३० - _____

प्रश्न ६) जोड्या लावा. (६)

घरे बांधणारा " " शिक्षक

आजार बरे करणारा " " गवंडी

शाळेत शिकवणारा " " शेतकरी

कपडे शिवणारा " " डॉक्टर

चपला तयार करणारा " " शिंपी

शेती करणारा " " चांभार

प्रश्न ७) प्रत्येकी दोन नावे लिहा (८)

१) ऋतूंची नावे १) _____ २) _____

२) महिन्यांची नावे १) _____ २) _____

३) दिशांची नावे १) _____ २) _____

४) वारांची नावे १) _____ २) _____

प्रश्न ८) प्रश्नांची उत्तरे लिहा (बारा, बाजारात, पूर्व, बुधवार, बाबांणी, मे) (६)

१) सूर्य कोणत्या दिशेला उगवतो ? _____

२) एका वर्षात किती महिने असतात? _____

३) एप्रिल नंतर कोणता महिना येतो? _____

४) केक कोणी आणला? _____

५) आई रमाला घेऊन कुठे गेली? _____

६) गुरुवार आधी कोणता वार येतो ? _____

प्रश्न ९) "माझा आवडता पक्षी" या विषयावर पाच वाक्ये लिहा (५)

कक्षा - २री
विषय - हिंदी
नाम - _____

पूर्णांक - १००

अ . क्र .

प्र . १) निम्नलिखित शब्दों में से उचित शब्द चुनकर खाली स्थान भरिए | १०

(सबक , पंजे , कोशिश , नटखट , जंगल , समय , मरिचल , अजीब , झाड़ी , सिपाही)

१) _____ चूहा भी चुपचाप उसके पीछे अंदर चला गया |

२) मुझे बेवकूफ बनाने की _____ न कर |

३) चलते - चलते वह घने _____ के बीच आ पहुँची |

४) लेकिन यह दीवार कुछ _____ थी |

५) चल हट यहाँ से , मेरा _____ खराब न कर |

६) एक _____ सी गाय पेड़ से बँधी हुई थी |

७) सीढ़ी पर _____ रखकर भीतर चला गया |

८) मगर अब दोवकी अपना _____ सीख चुकी थी |

९) _____ चूहे को पकड़ने दौड़े |

१०) मेहँदी की _____ ने काँटे चुभो दिए |

प्र . २) निम्नलिखित कविता की पंक्तियाँ पूरी कीजिए | ५

१) जमकर बैठा यहाँ _____

_____ न दिखता है ,

२) क्या _____ , क्या दरवाज़े

सब के सब ही _____ हैं |

छोड़ो आज _____ जी ,

प्र . ३) किसने , किससे कहा ? ८

१) "तुम मुझे कपड़ा नहीं बेचोगे ? "

२) " आहा ! आ गई मेरी बच्ची । "

३) " काम ! क्या काम ? "

४) " मुझे भूख लगी है ! कोई मुझे खाना खिला दो ! "

प्र. ४) निम्नलिखित प्रश्नों के उत्तर लिखिए ।

१) छोटा बाघ क्यों घबराया ?

२

२) चूहा कैसा था ?

२

३) दोक्की हमेशा किस पर रौब जमाती रहती ?

२

४) दोनों बहनें किसके साथ रहती थीं ?

२

५) बस कहाँ पर खड़ी थी ?

२

प्र. ५) निम्नलिखित प्रश्नों के उत्तर एक शब्द में लिखिए ।

६

१) बाघ सामने वाली सीट पर बैठकर कहाँ देखने लगा ?

२) चूहे ने राजा को कहाँ से उतरने के लिए कहा ?

३) छोटा बाघ फिर से कहाँ जाना चाहता था ?

४) दर्जी ने चूहे के लिए क्या तैयार कर दी ?

५) चारों तरफ़ क्या था ?

६) एककेसवाली को कितने बाल थे ?

(Std-2 , Hindi-3)

प्र-६) निम्नलिखित वाक्यों को शुद्ध करके फिर से लिखिए |

५

१) दादी माँ पूजा कर रहा है | _____

२) मोरनी नाच रहा है | _____

३) मोहन पत्र लिख रही है | _____

४) अध्यापक बच्चों को पढ़ा रही हैं | _____

५) राधा पढ़ रहा है | _____

प्र-७) निम्नलिखित गिनती को अंकों व अक्षरों में लिखिए |

६

क) ३४ _____

ख) इकतीस _____

ग) ३६ _____

घ) चालीस _____

ड) ३२ _____

च) अड़तीस _____

प्र-८) निम्नलिखित वाक्य में सही विशेषण शब्द चुनकर लिखिए |

१०

(गोल , सुगंधित , नीली , दयालु , हरी)

१) गाय _____ घास खा रही है |

२) आसमान में _____ पतंग उड़ रही है |

३) वह बच्चा बहुत _____ है |

४) मेरी माँ _____ रोटियाँ बनाती हैं |

५) चमेली एक _____ फूल है |

प्र-९) निम्नलिखित वाक्यों में सही क्रिया शब्द लिखिए |

१०

१) सोनू रोज मैदान में _____ है | (उड़ता , खेलता)

२) सोहन आम _____ है | (खाता , सोता)

३) माँ खाना _____ रही है | (बना , फेंकती)

४) काव्या पौधा _____ रही है | (बना , लगा)

५) राजा दान _____ रहा है | (कर , खा)

प्र-१०) निम्नलिखित वाक्य में सही शब्द चुनकर लिखिए |

१०

१) मंगलवार के बाद _____ आता है | (बुधवार , सोमवार)

२) शनिवार से पहले _____ आता है | (मंगलवार , शुक्रवार)

३) साल का ग्यारहवा महीना _____ है | (नवंबर , जनवरी)

- ४) गरमी की छुट्टियाँ _____ महीने में होती हैं | (अक्टूबर , मई)
५) एक वर्ष में _____ दिन होते हैं | (३६५ , २१५)

प्र. ११) निम्नलिखित विषय पर अनुच्छेद लिखिए |
' कबूतर '

१०

- १) _____

- २) _____

- ३) _____

- ४) _____

- ५) _____






- ६) _____

- ७) _____

क्रिया - कलाप

प्र . १२) दिए गए चित्रों के लिए उचित विशेषण शब्द लिखिए |
(हरा , मीठा , लाल , ऊँचा , काला)

१०



CHINMAYA VIDYALAYA TARAPUR

P-201 MIDC Indl Area, Saravali, Boisar

Evaluation-III 2018-2019

Sub-EVS

M.M. 100

STD-II

Name: _____

Roll No: _____

Q.1 Fill in the blanks:

10 M

1. _____ is the natural satellite of the earth.
2. Plants purify the air and give us _____ to breath.
3. Cows, buffaloes and goats give us _____.
4. Birds build _____ in trees.
5. Early man used the pole star to tell _____ at night.
6. There are _____ planets in our solar system.
7. A _____ is also known as the table land.
8. Two-third of the earth is covered with _____.
9. Sea water is _____. So we cannot drink it.
10. _____ of the sun in the sky helps us to know the time of the day.

Q.2 Choose the correct answer and fill in the blanks:

10M

1. _____ is the most beautiful part of the plant. (Stem, Root, Flower)
2. Vulture and hyenas eat the flesh of _____ animals. (dead, small, big)
3. Zebra is a _____ animal. (domestic, wild, pet)
4. _____ makes honey and wax. (Honeybee, Mosquito, Ant)
5. Big plants are called _____. (herbs, trees, climbers)
6. The sun is a huge ball of _____. (fire, snow, wax)
7. We get wool from _____. (sheep, cow, rabbit)
8. We live on the planet _____ (Mars, Saturn, Earth)
9. _____ grows in deserts. (Cactus, Lotus, Coconut)
10. The sun rises in the _____. (East, North, West)

Q.3 Match the following:

5 M

- | | |
|-----------|-------------|
| a. Rabbit | 1. stable |
| b. Bird | 2. kennel |
| c. Hen | 3. aquarium |
| D. Horse | 4. nest |
| e. Dog | 5. shed |
| | 6. coop |
| | 7. burrow |

Q.4) Answer the following questions:

20 M

1) Name the things that plants need to grow:

2) What are wild animals? Give example.

3) Name the water bodies that exist on the earth:

4) What is a valley?

5) What makes the sky beautiful?

6) When do we say that, it is night?

7) Why can't we see the moon during the day?

8) What are domestic animals? Give example.

9) Which animals are used to carry loads?

10) Name any four things that we get from domestic animals:

Q5. Answer the following questions:

1) a) Why do animals need shelter?

5M

b) How do planets and satellites shine at night even though they have no light of their own?

2) Give reasons.

a) Very few people live in the deserts.

3M

b) Leaves are called food factory of the plant.

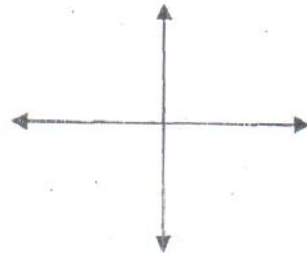
4M

3) What should be done to protect the earth?

4M

4) Label the directions correctly:

2M



5) Name the following:

5M

- a. Two plants that grow in water _____
- b. Two edible stems _____
- c. Two edible leaves _____
- d. Two plants that grow in desert _____
- e. Two landforms _____

6. Look at the word box. Find the same words in the word grid and circle them.

[Saturn, Mosquito, Ocean, Time, plant, climate, land, animal] 8M

A	N	I	M	A	L	L	T	Z
B	P	L	A	N	T	A	I	A
L	C	V	M	F	T	N	M	W
S	A	T	U	R	N	D	E	O
Z	N	L	K	O	E	Y	G	C
M	O	S	Q	U	I	T	O	E
C	M	Y	U	W	Z	Y	D	A
C	L	I	M	A	T	E	M	N

7) Complete the analogy:

4M

- a. Sunrise : East :: Sunset : _____
- b. A week : 7 days :: 1 Day _____
- c. Sunrise to sunset : Day :: Sunset to sunrise _____
- d. January : 31 days :: June : _____

Activity

20

1) Draw the following

The sun	The moon
---------	----------

2) Two landforms:

--	--

3) Two edible roots

--	--

(EV III-EVS-6 STD- 2)

4) Draw and label the different parts of a plant.

CHINMAYA VIDYALAYA TARAPUR
P-201, MIDC Indl.Area, Saravali, Boisar.

Evaluation - III- 2018 - 2019

Std: II

Sub: V.E.

M. Marks: 25

Name: _____

Roll No.: _____

Q. 1) Choose the correct answer from the bracket and fill in the blanks :[10X1=10]

- 1) We cheer our country by saying _____. [Jay Hind / Hari Om]
- 2) _____ is everywhere . [Demon / God]
- 3) The great rishis gave us the _____. [books / vedas]
- 4) Another name for India is _____. [Bharat Mata / USA]
- 5) We should _____ our nature . [respect / harm]
- 6) On Independence Day we hoist our _____. [clothes / national flag]
- 7) _____ gives us everything to make us happy . [Nature / Food]
- 8) We should not make public places _____. [clean / dirty]
- 9) We should _____ our country to the best of our ability . [serve / destroy]
- 10) We should not _____ the trees . [plant / cut]

Q. 2) Write Yes or No for the following sentences.

[5 X 1 = 5]

- 1) We should not steal the things . _____
- 2) Nature is kind to us . _____
- 3) We should climb trees and break branches . _____
- 4) It is difficult to love India . _____
- 5) We should pray to God everyday . _____

Q.3) Match the following :


[5 X 1 = 5]

- 1) ChinmayaJayanti
- 2) Motto of our school
- 3) MukhyaSwamiji
- 4) Fifth Veda
- 5) Aradhana Day

- H .H.Swami Tejomayanandaji
Keep Smiling
8th May
Mahabharata
3rd August
H .H.Swami Swaroopanandaji
30th June

Q.4) Draw any five things that God has given to us .

[5]



CHINMAYA VIDYALAYA TARAPUR

P-201, M.I.D.C. Indl. Area, Saravali, Boisar

Evaluation -III (2018-19)

Sub: Information Technology

Marks -40

RollNo. _____

Std: II

Name: _____

Q-1) Fill in the blanks:

[5x2=10]

1. The _____ displays the name of the program.
2. The _____ tool is used to draw square.
3. _____ option is like a toggle option.
4. We may get an _____ if we touch or pull any wire or plug.
5. To draw straight line hold down the _____ key while drawing.

Q-2) Match the following:

[6x1=6]



Draw freehand drawing



Close Button



Clear Mistakes



Minimize Button



Restore Button



Draws freehand drawing of different shapes and size

Q-3) Answer the following questions.

1. What is the use of Time/Date option?

[2]

2. Name the shapes of brush tool.

[2]

3. State the use of Font option.

[2]

4. Write any two rules to be followed in computer lab.

[2]

5. What is Notepad?

[3]

6. What is the use of Cut option?

[3]

7. Why should we maintain proper distance between our eyes and computer screen?

[3]

Q- 4 Label the components of the Notepad window.

[7]

